



Surname _____

Other Names _____

Centre Number _____

Candidate Number _____

Candidate Signature _____

GCSE

COMPUTER SCIENCE

Paper 2 Written Assessment

8520/2

Thursday 16 May 2019 Afternoon

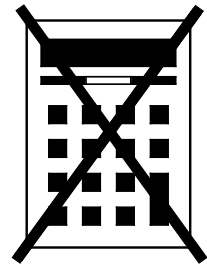
Time allowed: 1 hour 30 minutes

At the top of the page, write your surname and other names, your centre number, your candidate number and add your signature.

[Turn over]



There are no additional materials required for this paper.



INSTRUCTIONS

- **Use black ink or black ball-point pen. Use pencil only for drawing.**
- **Answer ALL questions.**
- **You must answer the questions in the spaces provided.**
- **Do all rough work in this book. Cross through any work you do not want to be marked.**
- **You must NOT use a calculator.**






INFORMATION

- **The total number of marks available for this paper is 80.**

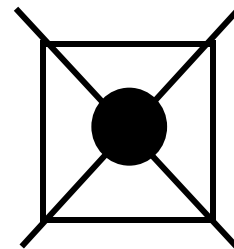


ADVICE

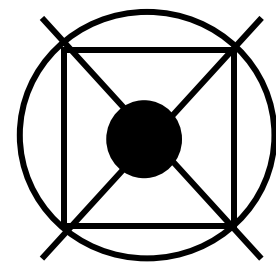
For the multiple-choice questions, completely fill in the lozenge alongside the appropriate answer.

CORRECT METHOD**WRONG METHODS**

If you want to change your answer you must cross out your original answer as shown.



If you wish to return to an answer previously crossed out, ring the answer you now wish to select as shown.



DO NOT TURN OVER UNTIL TOLD TO DO SO



Answer ALL questions in the spaces provided.

0 1 . 1

Convert the decimal number 197 into binary. [1 mark]

0 1 . 2

Convert the hexadecimal number A4 into decimal.

Show your working. [2 marks]

Answer _____



0	3
---	---

State ONE advantage of using Unicode instead of using ASCII. [1 mark]

0	4
---	---

Which TWO of the following are components of a CPU?

Shade TWO lozenges. [2 marks]

A Arithmetic logic unit

B Control unit

C Fan

D Hard disk drive

E Keyboard

F Power supply unit

[Turn over]



0	5
---	---

A computer game is one type of application software. State TWO other types of application software. You must NOT use brand names in your answer.

[2 marks]

1 _____

2 _____

11



0	6
---	---

Select the CORRECT statement about secondary storage.

Shade ONE lozenge. [1 mark]

A Secondary storage is a type of ROM.

B Secondary storage is non-volatile.

C Secondary storage is temporary.

D Secondary storage loses its content when it is turned off.

[Turn over]



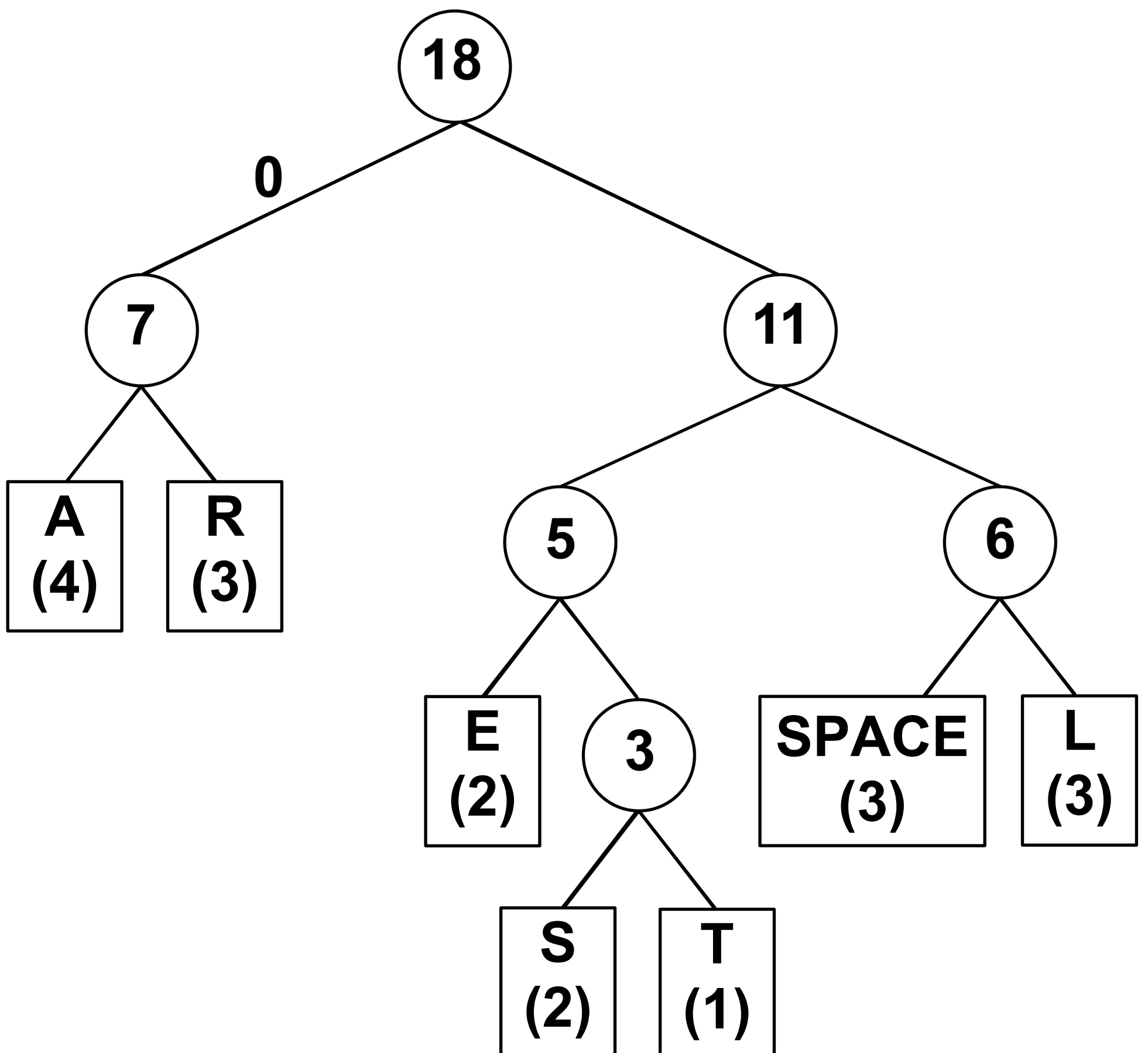
[Turn over]



08

The Huffman tree in **FIGURE 1** was generated for the string ARE ALL STARS REAL

FIGURE 1



0	8	.	1
---	---	---	---

Part of the string ARE ALL STARS REAL **was incorrectly encoded as in FIGURE 2 below.**

FIGURE 2

1111000010101011

What string does this encoding represent? [1 mark]

[Turn over]

BLANK PAGE



08.2

What would be the correct binary encoding for the substring STAR?

Write the correct encoding below the letters in the table. [2 marks]

S	T	A	R

[Turn over]

<hr/>
8



1	0
---	---

**Define the term EMBEDDED SYSTEM.
[2 marks]**

[Turn over]



1	1	.	1
---	---	---	---

Draw a simple diagram to show a star network topology containing four desktop computers. [2 marks]



1 1 . 2

Draw a simple diagram to show a bus network topology containing four desktop computers. [2 marks]

[Turn over]

10



BLANK PAGE



1 1 . 3

State TWO advantages of using a star topology instead of a bus topology.
[2 marks]

1 _____

2 _____

1 1 . 4

State ONE disadvantage of using a star topology instead of a bus topology.
[1 mark]

[Turn over]



11.7

Which TWO of the following are email protocols?

Shade TWO lozenges. [2 marks]

A FTP

B HTTP

C IMAP

D SMTP

E TCP

F UDP

[Turn over]

16



1 2 . 1

Explain why a firewall improves network security. [2 marks]

BLANK PAGE

[Turn over]



1 2 . 2

A company has decided to move its business online but it is concerned about making sure that only authorised users can gain access to the system. The company has set up a CAPTCHA system to check that the user is not a robot.

Explain THREE different electronic methods that could then be used to confirm user identity. [6 marks]

BLANK PAGE

[Turn over]



1	3
---	---

The four layers of the TCP/IP network model are shown below.

For each row in FIGURE 3, on the opposite page, write the letter A, B, C or D that matches the description.

**Each letter should only be used once.
[2 marks]**

- A Application layer**
- B Transport layer**
- C Internet layer**
- D Link layer**



FIGURE 3

DESCRIPTION	LETTER
Addresses data for transmission	
Sets up the communication between the two hosts	
Where the network hardware is located	
Where the user software, such as web browsers or email programs, operates	

[Turn over]

14



1	5
---	---

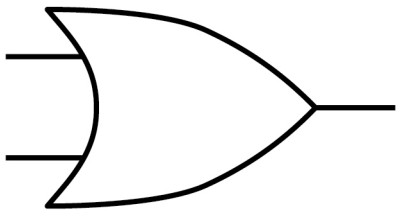
A burglar alarm sounds an alarm when it is armed (turned on) and the window or door is opened.

The truth table for this basic system is shown in FIGURE 4.

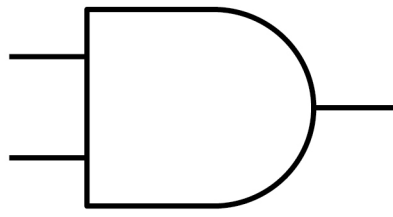
FIGURE 4

Armed (A) 0 = Off 1 = On	Door (B) 0 = Closed 1 = Open	Window (C) 0 = Closed 1 = Open	Alarm (Q) 0 = Off 1 = On
0	0	0	0
0	0	1	0
0	1	0	0
0	1	1	0
1	0	0	0
1	0	1	1
1	1	0	1
1	1	1	1

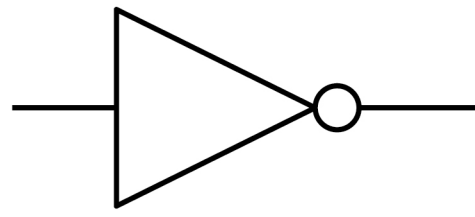




OR



AND



NOT

Draw the logic circuit that represents the truth table in FIGURE 4. You MUST use the correct symbols for logic gates. You may not need to use all the gates shown. [3 marks]



[Turn over]



1	6
---	---


Specifications for two different devices are shown in FIGURE 5, on the opposite page.

Discuss the advantages and disadvantages of DEVICE A compared to DEVICE B.

Your answer should explain the impact each advantage/disadvantage will have on the operation of the device.

**You should assume that any aspects of the specifications NOT mentioned in FIGURE 5 are the same for both devices.
[12 marks]**

FIGURE 5



DEVICE A	DEVICE B
Quad (4) core 1.6 GHz CPU with 8 MB cache	Dual (2) core 3.9 GHz CPU with 2 MB cache
16 GB RAM	4 GB RAM
2 TB Hard Disk Drive (HDD)	250 GB Solid State Drive (SSD)

[Turn over]



BLANK PAGE



BLANK PAGE

For Examiner's Use	
Pages	Mark
4–8	
9–15	
16–18	
19–23	
24–31	
32–35	
36–42	
TOTAL	

Copyright information

For confidentiality purposes, from the November 2015 examination series, acknowledgements of third party copyright material will be published in a separate booklet rather than including them on the examination paper or support materials. This booklet is published after each examination series and is available for free download from www.aqa.org.uk after the live examination series.

Permission to reproduce all copyright material has been applied for. In some cases, efforts to contact copyright-holders may have been unsuccessful and AQA will be happy to rectify any omissions of acknowledgements. If you have any queries please contact the Copyright Team, AQA, Stag Hill House, Guildford, GU2 7XJ

Copyright © 2019 AQA and its licensors. All rights reserved.

IB/M/Jun19/AMAS/8520/2/E2